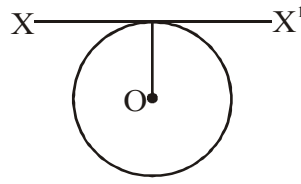




5. A thin wire of length 'L' and uniform linear mass density ' $\rho$ ' is bent into a circular loop with centre 'O' as shown. The moment of inertia of the loop- about the axis  $XX^1$  is

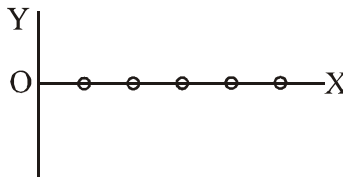


- (A)  $\frac{\rho L^3}{8\pi^2}$       (B)  $\frac{\rho L^3}{16\pi^2}$       (C)  $\frac{5\rho L^3}{16\pi^2}$       (D)  $\frac{3\rho L^3}{8\pi^2}$

6. Which of the following is not equal to watt :

[A] joule/second      [B] Ampere  $\times$  volt      [C] (Ampere)<sup>2</sup>  $\times$  ohm      [D] Ampere/volt

7. The root mean square distance of 5 identical particles of masses 1 gram each are distributed along OX is 8 cm (from O). The total moment of inertia about OX is



- (A) 40 gcm<sup>2</sup>      (B) 320 gcm<sup>2</sup>      (C) 230 gcm<sup>2</sup>      (D) 203 gcm<sup>2</sup>

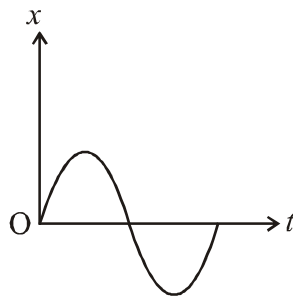
8. A solid sphere of mass 1kg rolls on a table with linear speed 1 m/s. Its total kinetic energy is

(A) 0.7 J      (B) 1 J      (C) 1.4 J      (D) 0.35 J

9. A particle of mass 10 gm is executing simple harmonic motion with an amplitude of 0.5 m and periodic time of  $\pi/5$  sec. The maximum value of the force acting on the particle is

(A) 0.5 N      (B) 2.5 N      (C) 25 N      (D) 5 N

10. The displacement time graph of a particle executing S.H.M. is as shown in the figure. The corresponding force time graph of the particle is



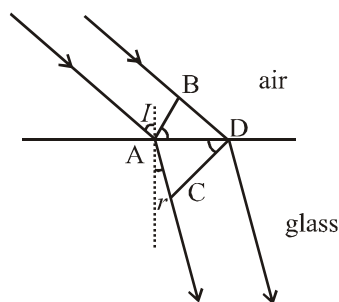
- (A)      (B)      (C)      (D)

11. If  $\vec{a} = 5\hat{i} + 3\hat{j} + 4\hat{k}$  and  $\vec{b} = 6\hat{i} - 8\hat{j}$ . Then  $|\vec{a} + \vec{b}|$  is equal to :

[A]  $5\sqrt{2}$       [B]  $7\sqrt{2}$       [C]  $9\sqrt{2}$       [D]  $10\sqrt{2}$

12. Strain energy of a wire is  $1.8 \times 10^{-3}$  J and strain energy per unit volume under the same conditions is  $6 \times 10^{-3}$  SI unit. If the radius of wire is  $\frac{1}{\pi}$  SI units. Then the length of wire is  
 (A) 0.3 m (B) 0.942 m (C) 10.46 m (D) 9.42 m
13. Which of the following is used in case of rain coat  
 (A) Low adhesion (B) High cohesion  
 (C) Angle of contact is reduced (D) Low cohesion
14. A film of soap solution is formed in a metal ring of radius 1 cm. If the surface tension of soap solution is 0.035 J/m, the surface energy of the film is  
 (A)  $2.19 \times 10^{-5}$  J (B)  $2.19 \times 10^{-2}$  J (C)  $3.45 \times 10^{-3}$  J (D)  $4.19 \times 10^{-2}$  J
15. A square wire frame of side 'L' is dipped in a liquid. On taking out a membrane is formed. If the surface tension is 'T', the force acting on the frame will be  
 (A) 2 TL (B) 4TL (C) 8 TL (D) 10TL
16. A rigid body of mass m is moving in a circle of radius r with a constant speed v. The force on the body is  $\frac{mv^2}{r}$  and is directed towards the centre. What is the work done by this force in moving the body over half the circumference of the circle.  
 [A]  $\frac{mv^2}{\pi r^2}$  [B] zero [C]  $\frac{mv^2}{r^2}$  [D]  $\frac{\pi r^2}{mv^2}$
17. Two progressive waves of same frequencies have amplitude 4 cm and 3 cm respectively. If they are travelling along the same line and superpose over each other, the ratio of maximum to minimum intensities will be  
 (A) 4:3 (B) 6:9 (C) 7:1 (D) 49:1
18. The equation of a stationary wave is  $y = 5 \sin \frac{\pi x}{3} \cos 40\pi t$  where x & y are in cm & t in sec. Then the separation between two consecutive nodes is  
 (A) 1.5 cm (B) 6 cm (C) 3 cm (D) 12 cm
19. What is the phase difference between two waves, if the resultant amplitude due to their superposition is same as that of the waves?  
 (A)  $\pi/2$  (B)  $\pi$  (C)  $2\pi/3$  (D)  $\pi/3$
20. When an open pipe is vertically dipped in water 10 cm is inside the water, then fundamental frequency of air column is 400 Hz and when it is 6 cm inside water then fundamental frequency of the column is 300 Hz. Then the length of pipe will be  
 (A) 14 cm (B) 12 cm (C) 22 cm (D) 2 cm
21. A body of mass 2 kg rests on a rough inclined plane making an angle with the horizontal. The coefficient of static friction between the block and the plane is 0.7. The frictional force on the block is :  
 [A] 9.8 N [B]  $0.7 \times 9.8 \times \sqrt{3}$  N [C]  $9.8 \times \sqrt{3}$  N [D]  $0.7 \times 9.8$  N

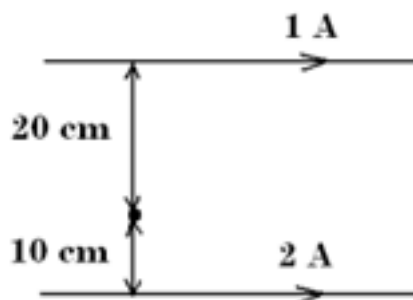
22. Change in pressure of an ideal gas causes  
 (A) Change in rms velocity (B) Change in velocity of sound through gas  
 (C) Change in mean free path (D) Change in the ratio of pressure to density of gas
23. Two bodies A and B are painted with red and black colours respectively. If  $E_R$  and  $E_B$  are their emissive power then  
 (A)  $E_R < E_B$  (B)  $E_R > E_B$  (C)  $E_R = E_B$  (D) Cannot predicted
24. A tungsten filament of an electric bulb has surface area of  $0.30 \text{ cm}^2$ , and is raised to a temperature of  $2727^\circ \text{C}$  by applying electric power to it. Emissivity of the filament is 0.35 and stefan's constant is  $5.7 \times 10^{-5} \text{ erg/cm}^2 \text{sec K}^4$ . The rate of supply of electric power to maintain the temperature of the filament constant is  
 (A) 0.482 watt (B) 4.82 watt (C) 48.2 watt (D) 482 watt
25. Emissive power of any surface  
 (A) Decreases with temperature  
 (B) Does't change with temperature  
 (C) Increase with temperature  
 (D) Decreases initially upto a certain temperature and then increases
26. A U-tube of uniform cross-section is partially filled with a liquid I. Another liquid II which does not mix with liquid I is poured into right side of U-tube, it is found that the liquid levels of the right side of the tube remains same while the level of liquid in left side is raised by 2cm. If the specific gravity of liquid I is 1.1, the specific gravity of liquid II must be :  
 [A] 2.2 [B] 1.1 [C] 4.4 [D] 1.0
27. If  $\lambda_1$  is wavelength of light in medium of R.I.  $\mu_1$ ,  $\lambda_2$  is wavelength in medium of R.I.  $\mu_2$ . Then which of the following is correct.  
 (A)  $\frac{\mu_1}{\mu_2} = \frac{\lambda_1}{\lambda_2}$  (B)  $\frac{\mu_1}{\mu_2} = 1$  (C)  $\mu_1 \lambda_1 = \mu_2 \lambda_2$  (D)  $\mu_1 \lambda_2 = \mu_1 \lambda_2$
28. Using following diagram, the refractive index of glass w.r.t. air is



- (A)  $\frac{BD}{AC}$  (B)  $\frac{AB}{CD}$  (C)  $\frac{BD}{AD}$  (D)  $\frac{AC}{AD}$
29. The colour of bright fringe nearest central fringe in the interference pattern with white light will be  
 (A) violet (B) red (C) green (D) yellow
30. The path difference between two waves is  $3.75 \mu\text{m}$  and the wavelength is  $5000 \text{ \AA}$ . The point is  
 (A) Uncertain (B) Dark (C) Partically bright (D) Bright

31. A cut diamond sparkles because of its :  
 [A] Hardness [B] High refractive index  
 [C] Emission of light by the diamond [D] Absorption of light by the diamond
32. Two interfering beams have intensities in the ratio of 9 : 4. Then the ratio of maximum to minimum intensity in interference pattern is  
 (A) 25 : 1 (B) 13 : 5 (C) 5 : 1 (D) 3 : 2
33. If  $n$  drops each of capacitance  $C$  and charged to a potential  $V$  coalesce to form a big drop. The ratio of energy stored in big drop to that in each drop will be  
 (A)  $n : 1$  (B)  $n^{4/3} : 1$  (C)  $n^{5/3} : 1$  (D)  $n^{2/3} : 1$
34. Two wires of same material are connected in parallel with cell. The ratio of their length is 4 : 3 and that of radii is 2 : 3. The ratio of currents passing through wires is  
 (A) 2 : 3 (B) 4 : 3 (C) 1 : 3 (D) 1 : 2
35. A potentiometer wire of length 3m has resistance of  $100\Omega$ . It is connected to a battery of 6 volt. The potential difference between two points on wire separated by 50 cm will be  
 (A) 1 volt (B) 1.5 volt (C) 2 volt (D) 2.5 volt
36. Where should an object be placed in front of a convex lens to get a real image of the size of the object ?  
 [A] At the principal focus of the lens  
 [B] At twice the focal length  
 [C] At infinity  
 [D] Between the optical centre of the lens and its principal focus.
37. In an ammeter, 4% of main current is passing through the galvanometer. Shunt resistance is  $5\Omega$  hence resistance of galvanometer will be  
 (A)  $60\Omega$  (B)  $120\Omega$  (C)  $240\Omega$  (D)  $480\Omega$
38. A coil has resistance 30 ohm and inductive reactance 20 ohm at 50 Hz frequency. If an A.C. source, of 200 volt, 100 Hz is connected across the coil, the current in the coil will be  
 (A)  $\frac{20}{\sqrt{13}}$  A (B) 2.0 A (C) 4.0 A (D) 8.0 A
39. Dimensions of magnetic potential are  
 (A)  $[M^1L^2T^{-2}A^{-2}]$  (B)  $[M^1L^1T^2]$  (C)  $[M^1L^1T^{-2}A^{-1}]$  (D)  $[M^2L^2T^{-2}A^{-1}]$
40. LCR circuit produces the phase difference of  $60^\circ$  between current and emf of maximum values 4A & 60 volt respectively. The average power consumed in circuit will be.  
 (A) 20 Watt (B) 40 Watt (C) 60 Watt (D) 80 Watt

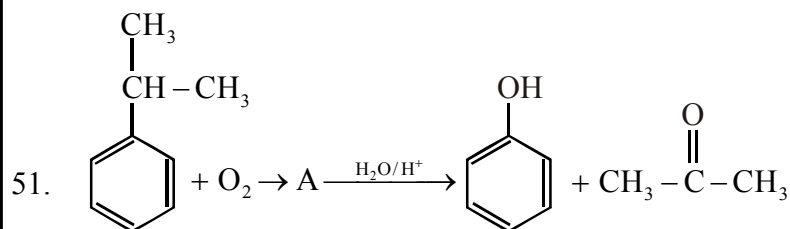
41. Two long parallel wires carrying current 1 A and 2 A as shown in figure. The ratio of magnitude of magnetic field at the point P due to 1 A to 2 A is:



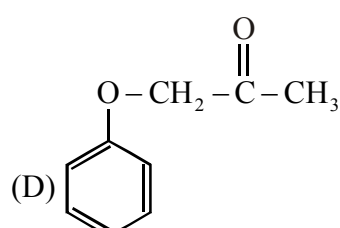
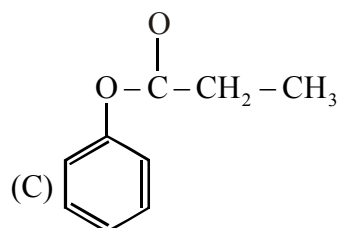
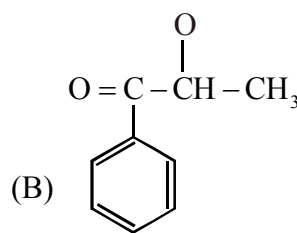
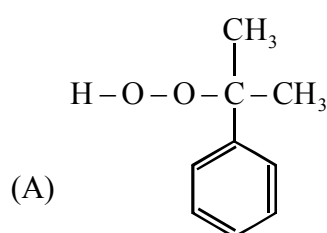
- [A] 1 : 1                      [B] 1 : 2                      [C] 2 : 1                      [D] 1 : 4
42. A rectangular coil of 20 turns and area of cross section is  $25 \text{ cm}^2$  has a resistance of  $100 \Omega$ . If the magnetic field, is perpendicular to plane of the coil changes at the rate of  $1000 \text{ T/S}$ , the induced current will be.  
 (A) Zero                      (B) 5A                      (C) 0.5 A                      (D) 500 A
43. A transformer has efficiency of 70%. The primary coil is connected to a.c. mains of 210 volts & draws a current of 0.1A. The maximum power of a load that the can be connected with secondary coil is approximately.  
 (A) 2.1 W                      (B) 10 W                      (C) 15 W                      (D) 19 W
44. Photoelectric effect is not produced by  
 (A) UV rays                      (B) X- rays                      (C)  $\gamma$  - rays                      (D) Radiowaves.
45. An electron of mass  $m_e$  and proton of mass  $m_p$  are accelerated through same potential difference. The ratio of deBroglie wavelength associated with electron and proton is  
 (A) 1:1                      (B)  $\frac{m_p}{m_e}$                       (C)  $\frac{m_e}{m_p}$                       (D)  $\sqrt{\frac{m_p}{m_e}}$
46. The energy of electron in third orbit is  $-1.51 \text{ eV}$ . The energy of electron in fourth orbit will be  
 (A) 8.5 eV                      (B) 0.85 eV                      (C) 1.51 eV                      (D) -0.85 eV
47. Work function of a metal of 2 eV. The maximum wavelength of photons required to emit electrons from its surface is  
 (A)  $6215 \text{ \AA}$                       (B)  $6500 \text{ \AA}$                       (C)  $5700 \text{ \AA}$                       (D)  $5900 \text{ \AA}$
48. For working of any type of transistor, emitter junction and collector junction should be....  
 (A) Reverse and forward bias respectively                      (B) Forward and reverse bias respectively  
 (C) Forward an forward bias respectively                      (D) Reverse and reverse bias respectively
49. Troposphere layer of atmosphere is nearly up to height ..... from earth surface :  
 (A) 12 Km to 50 Km                      (B) 50 Km to 80 Km                      (C) 12 Km                      (D) 12 Km to 80 Km
50. The magnetic lines of force inside a bar magnet:  
 [A] are from north-pole to south-pole of the magnet.  
 [B] do not exist  
 [C] depend upon the arc of cross-section of the bar magnet  
 [D] are from south-pole to north-pole of the magnet

**CHEMISTRY****[Single Answer Choice Type]**

This Section contains **50** Single choice questions. Each question has 4 choices (A), (B), (C) and (D) out of which **ONLY ONE** is correct.



A is



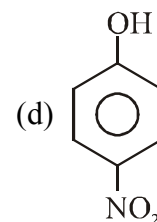
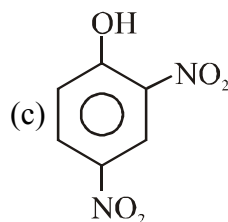
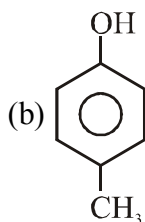
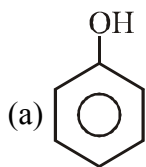
52. Which of the following does not react with  $\text{NaHSO}_3$
- (A)  $\text{C}_2\text{H}_5\text{COC}_2\text{H}_5$       (B)  $\text{CH}_3\text{COC}_2\text{H}_5$       (C)  $\text{CH}_3\text{COC}_3\text{H}_7$       (D) Benzaldehyde
53. The weakest acid among the following is
- (A) HF      (B) HCl      (C) HBr      (D) HI
54. The general formula for carbohydrates is
- (A)  $\text{C}_x(\text{H}_2\text{O})_y$       (B)  $\text{C}_n\text{H}_{2n+1}\text{COOH}$       (C)  $\text{C}_n\text{H}_{2n+2}$       (D)  $\text{C}_n\text{H}_{2n+1}\text{OH}$
55. Which isomer of  $\text{C}_4\text{H}_9\text{Br}$  produces 2-methyl propan-2-ol by reaction with aq. KOH
- (A) n-butyl bromide      (B) sec butyl bromide      (C) Iso butyl bromide      (D) Tert. butyl bromide
56. The chemical which give relief from mental tension are called
- (A) analgesics      (B) antacids      (C) tranquilizers      (D) antibiotics
57. Poly caprolactum is known as
- (A) Nylon-6      (B) Nylon-66      (C) Polyester fibre      (D) Regenerated fibre
58. Radioactive lanthanide is
- (A) Pm      (B) Sm      (C) Eu      (D) Gd

59. 'Alkanone' is the IUPAC name of the following compounds  
 (A) Aldehyde (B) Ethers (C) Alcohols (D) Ketones
60. If a salt bridge is removed between, the voltage of the cell  
 (A) drops to zero (B) does not change (C) increases rapidly (D) increases gradually
61. What is the mass per cent of carbon in carbon dioxide?  
 (A) 0.034% (B) 3.4% (C) 27.27% (D) 28.7%
62. The basic character of hydrides of the 15-group elements decreases in the order  
 (A)  $\text{SbH}_3 > \text{PH}_3 > \text{AsH}_3 > \text{NH}_3$  (B)  $\text{NH}_3 > \text{SbH}_3 > \text{PH}_3 > \text{AsH}_3$   
 (C)  $\text{NH}_3 > \text{PH}_3 > \text{AsH}_3 > \text{SbH}_3$  (D)  $\text{SbH}_3 > \text{AsH}_3 > \text{PH}_3 > \text{NH}_3$
63. Graphite is a soft lubricant extremely difficult to melt. The reason for this anomalous behaviour is that graphite  
 (A) is a non-crystalline substance  
 (B) is an allotropic form of diamond  
 (C) has molecules of variable molecular masses like polymers  
 (D) has carbon atoms arranged in large plates of rings of strongly bound C-atoms with weak interplate bonds.
64. Some statements regarding defects in solids are given below.  
 (P) Frenkel defect is usually favoured by a very small difference in sizes of cation and anion.  
 (Q) Frenkel defect is a dislocation defect.  
 (R) Trapping of an electron in the lattice leads to formation of F-center.  
 (S) Schottky defects have no effect on the physical properties of solids.  
 Among these the correct statement(s)  
 (A) P, Q and R (B) Q and R (C) Only Q (D) Q and S
65. Equimolar solutions of two non-electrolytes in the same solvent should have  
 (A) same boiling point but different freezing point (B) same freezing point but different boiling point  
 (C) same boiling point and same freezing point (D) different boiling point and different freezing point
66. The differential rate expression for the reaction,  $\text{H}_2 + \text{I}_2 \longrightarrow 2\text{HI}$ , is  
 (A)  $\frac{-d[\text{H}_2]}{dt} = \frac{-d[\text{I}_2]}{dt} = \frac{-d[\text{HI}]}{dt}$  (B)  $\frac{d[\text{H}_2]}{dt} = \frac{d[\text{I}_2]}{dt} = \frac{d[\text{HI}]}{dt}$   
 (C)  $\frac{1}{2} \cdot \frac{d[\text{H}_2]}{dt} = \frac{1}{2} \cdot \frac{d[\text{I}_2]}{dt} = \frac{d[\text{HI}]}{dt}$  (D)  $-2 \frac{d[\text{H}_2]}{dt} = -2 \frac{d[\text{I}_2]}{dt} = \frac{d[\text{HI}]}{dt}$
67. The shape of  $\text{BrF}_5$  is  
 (A) octahedral (B) pentagonal bipyramidal  
 (C) trigonal bipyramidal (D) square pyramidal
68. Mole fraction of the solute in a 1 molal aqueous solution is  
 (A) 1.770 (B) 0.177 (C) 0.0177 (D) 0.0344



69. The Coordination number and oxidation state of the element "M" in the complex  $[M(en)_2(C_2O_4)]NO_2$  are respectively.  
 (A) 6 and + 2                      (B) 4 and + 2                      (C) 6 and + 3                      (D) 4 and + 3
70. In the reaction,  $H_2O_2 + Na_2CO_3 \longrightarrow Na_2O_2 + CO_2 + H_2O$  the substance undergoing oxidation is  
 (A)  $H_2O_2$                       (B)  $Na_2CO_3$                       (C)  $Na_2O_2$                       (D) None of these
71. Which one of the following is a mineral of iron  
 (A) Cassiterite                      (B) Magnetite                      (C) Pyrolusite                      (D) Malachite
72. Which of the following reactions can be brought about by acidified potassium dichromate?  
 (A)  $SO_2 \longrightarrow H_2SO_4$                       (B)  $NO_3^- \longrightarrow NO_2^-$   
 (C)  $CH_3CHO \longrightarrow CH_3CH_2OH$                       (D) both (A) and (B)
73.  $Li_2CO_3$  decomposed at a lower temperature whereas  $Na_2CO_3$  at higher temperature. This is due to  
 (A) small Li ion                      (B) large  $CO_3^{2-}$  ion  
 (C) high hydration enthalpy of Li                      (D) All of the above
74. In the following sequence of reactions, D is  
 $C_2H_4 \xrightarrow{HBr} A \xrightarrow{aq.NaOH} B \xrightarrow{Na} C \xrightarrow{CH_3I} D$   
 (A) butane                      (B) ethane                      (C) ethyl methyl ether                      (D) propane
75. The organic chloro compound which shows complete stereochemical inversion during  $SN^2$   
 (A)  $(C_2H_5)_2CHCl$                       (B)  $(CH_3)_3CCl$                       (C)  $(CH_3)_2CHCl$                       (D)  $CH_3Cl$
76. Silicon has a strong tendency to form polymers like silicones. The chain length of silicone polymer can be controlled by adding  
 (A)  $MeSiCl_3$                       (B)  $Me_2SiCl_2$                       (C)  $Me_3SiCl$                       (D)  $Me_4Si$
77. Arrange the following;  
 (I)  $CH_3NH_2$                       (II)  $(CH_3)_2NH$                       (III)  $C_6H_5NH_2$                       (IV)  $(CH_3)_3N$   
 In increasing order of basic nature in aqueous medium  
 (A)  $II < I < IV < III$                       (B)  $III < IV < I < II$                       (C)  $I < II < III < IV$                       (D)  $II < III < I < IV$
78. Clemmensen reduction of a ketone is carried out in the presence of which of the following?  
 (A)  $H_2$  and Pt as catalyst                      (B) Glycol with KOH                      (C) Zn – Hg with HCl  
 (D)  $LiAlH_4$
79. What is the mass ratio of isotopes of hydrogen?  
 (A) 1 : 1 : 1                      (B) 1 : 2 : 1                      (C) 1 : 2 : 3                      (D) 1 : 3 : 2
80. A well stoppered thermosflask contains some ice-cubes, this is example of  
 (A) closed system                      (B) open system  
 (C) Isolated system                      (D) non thermodynamic system

81. Among the compounds



the strength of acidity is in the order.

- (A)  $b > a > c > d$       (B)  $c > d > a > b$       (C)  $a > d > c > b$       (D)  $d > c > a > b$

82. Which of the following is an example of absorption?

- (A) Water on silica gel      (B) Water on calcium chloride  
(C) Hydrogen on finely divided nickel      (D) Oxygen on metal surface

83. Which of the following is a secondary cell ?

- (A) lead storage battery      (B) nickel cadmium storage cell  
(C) mercury cell      (D) both (A) and (B)

84. Which of the following is a heterocyclic compound?

- (A) Phenanthrene      (B) Thiophene      (C) Phenol      (D) Aniline

85. If concentration of reactant is increased, the rate of reaction :

- (A) Remains unaffected      (B) Increases  
(C) Decreases      (D) may increase or decrease

86.  $\begin{array}{c} \text{O} \\ || \\ -\text{C}- \end{array}$  groups in ketone is called

- (A) Carboxyl group      (B) Acetyl group      (C) Formo group      (D) Oxo group

87. The osmotic pressure of 15% black cane sugar solution at 150°C is

- (A) 12.05 atm      (B) 18.55 atm      (C) 17.05 atm      (D) 15.05 atm

88. In the reaction,  $\text{C}_2\text{H}_5\text{I} \xrightarrow{\text{alc. KOH}} \text{X} \xrightarrow{\text{Br}_2} \text{Y} \xrightarrow{\text{KCN}} \text{Z}$ ; X, Y and Z are respectively.

- (A)  $\text{C}_2\text{H}_4$ ,  $\text{C}_2\text{H}_5\text{Br}$ ,  $\text{C}_2\text{H}_5\text{CN}$   
(B)  $\text{C}_2\text{H}_5\text{OH}$ ,  $\text{C}_2\text{H}_5\text{Br}$ ,  $\text{C}_2\text{H}_5\text{CN}$   
(C)  $\text{C}_2\text{H}_4$ ,  $\text{CH}_2\text{Br}-\text{CH}_2\text{Br}$ ,  $\text{CH}_2\text{CN} \cdot \text{CH}_2\text{CN}$   
(D)  $\text{C}_2\text{H}_4$ ,  $\text{C}_2\text{H}_4\text{Br}_2$ ,  $\text{C}_2\text{H}_5\text{CN}$

89. Which one of the following reagents may be used to distinguish between phenol and benzoic acid?

- (A) Aq. NaOH      (B) Tollen's reagent      (C) Neutral  $\text{FeCl}_3$       (D) Molisch reagent

90. Suspension of slaked lime in water is known as

- (A) lime water      (B) quick lime  
(C) milk of lime      (D) aqueous solution of slaked lime

91. A solution containing  $10\text{g dm}^{-3}$  of urea (Mol. Mass = 60) is isotonic with a 5% (w/v) solution of a non-volatile solute. The molecular mass (in  $\text{g mol}^{-1}$ ) of the non-volatile solute is  
(A) 350 (B) 200 (C) 250 (D) 300
92. On heating ozone, its volume  
(A) Decreases to half (B) Becomes double  
(C) Increases to  $3/2$  times (D) Remain unchanged
93. Alumina is  
(A) acidic (B) amphoteric (C) basic (D) None of these
94. Binary solution contains  
(A) solute and solvent in same phase  
(B) solute and two solvent in different phase  
(C) one solvent in solid and two solute in liquid phase  
(D) solute and solvent may have same or different phase
95. Chlorobenzene on heating with aq.  $\text{NH}_3$  under pressure in the presence of  $\text{Cu}_2\text{Cl}_2$ , gives  
(A) benzamide (B) aniline  
(C) o-aminochlorobenzene (D) dichlorobenzene
96. 2, 3-dimethylbutane can be obtained from wurtz reaction by using  
(A) n- iodine alone (B) ethyl chloride and methyl chloride  
(C) iso-propyl iodide alone (D) 2-iodobutane alone
97. If two gram equivalent solute present in one  $\text{dm}^3$  of solvent, it is  
(A) one molal sol<sup>n</sup> (B) one normal sol<sup>n</sup> (C) two normal sol<sup>n</sup> (D) 2 molal sol<sup>n</sup>
98. Carboic acid is  
(A)  $\text{C}_6\text{H}_5\text{OH}$  (B)  $\text{C}_6\text{H}_5\text{COOH}$  (C)  $\text{C}_6\text{H}_6\text{Cl}_6$  (D) p- $\text{C}_6\text{H}_4\text{Cl}_2$
99. Heat of combustion of C (s),  $\text{H}_{2(\text{g})}$  &  $\text{CH}_{4(\text{g})}$  are  $-393.71$ ,  $-285.77$  and  $-890.36$  KJ respectively. What will be heat of formation of  $\text{CH}_{4(\text{g})}$ ?  
(A)  $-74.86$  KJ (B)  $+748.9$  KJ (C)  $-1855.61$  KJ (D)  $+1855.6$  KJ
100. The vapour pressure of the solution is highest for  
(A) 0.1 M sugar sol<sup>n</sup> (B) 0.1 M KCl sol<sup>n</sup>  
(C) 0.1M  $\text{Ba}(\text{NO}_3)_2$  sol<sup>n</sup> (D) 0.1 M silver nitrate sol<sup>n</sup>